

## More Than, Less Than


## Which Bar Model?

## Task A

1 Zara has £10. She has £6 less than Kate. **How much money does Kate have?**



2 Kam has £10. Jack has £6 less than Kam. **How much money do they have altogether?**



3 Jen has £10. Amy has £6. **How much money do Jen and Amy have altogether?**



4 Ben and Tim have £10. Ben has £6 more than Tim. **How much money does Tim have?**



## More Than, Less Than


## Which Bar Model?

## Task A

1 Zara has £10. She has £6 less than Kate. **How much money does Kate have?**



2 Kam has £10. Jack has £6 less than Kam. **How much money do they have altogether?**



3 Jen has £10. Amy has £6. **How much money do Jen and Amy have altogether?**


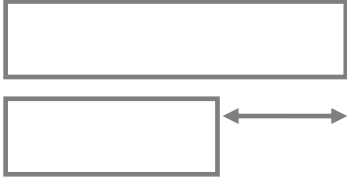



4 Ben and Tim have £10. Ben has £6 more than Tim. **How much money does Tim have?**



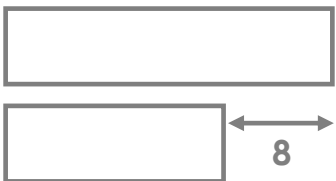
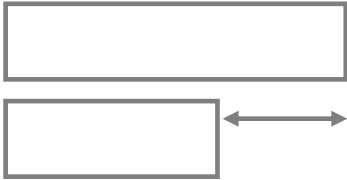

# More Than, Less Than

# Task B Version 1

Question:	Finish the bar model and answer:
Pete has 25 stickers. Joe has 8 stickers fewer than Pete. <b>How many stickers do they have altogether?</b>	
Zack has £14. Zack has £4 more than Harry. <b>How much money does Harry have?</b>	
Jen and Amy have £14 in total. Jen has £4 more than Amy. <b>How much money does Jen have?</b>	


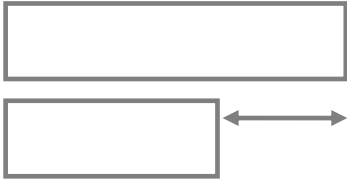
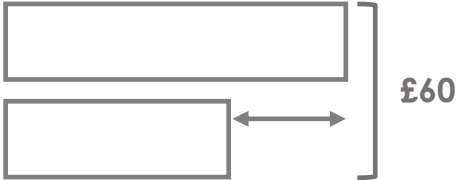
# More Than, Less Than

# Task B Version 1

Question:	Finish the bar model and answer:
Pete has 25 stickers. Joe has 8 stickers fewer than Pete. <b>How many stickers do they have altogether?</b>	
Zack has £14. Zack has £4 more than Harry. <b>How much money does Harry have?</b>	
Jen and Amy have £14 in total. Jen has £4 more than Amy. <b>How much money does Jen have?</b>	

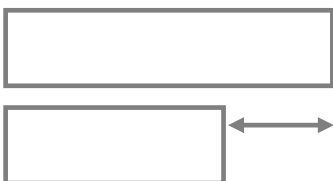
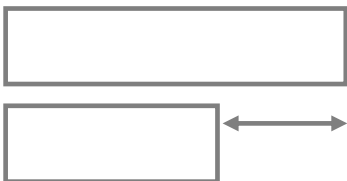
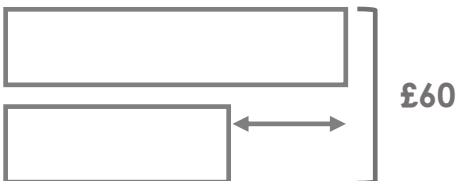
## More Than, Less Than

## Task B Version 2

Question:	Finish the bar model and answer:
Pete has 125 stickers. Joe has 39 stickers fewer than Pete. <b>How many stickers do they have altogether?</b>	
Zack has £324 Zack has £108 more than Harry. <b>How much money does Harry have?</b>	
Jen and Amy have £60 in total. Jen has £10 more than Amy. <b>How much money does Jen have?</b>	

## More Than, Less Than

## Task B Version 2

Question:	Finish the bar model and answer:
Pete has 125 stickers. Joe has 39 stickers fewer than Pete. <b>How many stickers do they have altogether?</b>	
Zack has £324 Zack has £108 more than Harry. <b>How much money does Harry have?</b>	
Jen and Amy have £60 in total. Jen has £10 more than Amy. <b>How much money does Jen have?</b>	

# More Than, Less Than

# Task C

Question:	Bar model and answer:
<p>Altogether, Ben and Tim have 23 sweets.</p> <p>Ben has 1 sweet more than Tim.</p> <p><b>How many sweets does Ben have?</b></p>	
<p>Altogether, Kate and Zara have 23 grapes.</p> <p>Kate has 5 more grapes than Zara.</p> <p><b>How many grapes does Kate have?</b></p>	
<p> +  = 80</p> <p> -  = 10</p>	<p> =       =</p>

# More Than, Less Than

# Task C

Question:	Bar model and answer:
<p>Altogether, Ben and Tim have 23 sweets.</p> <p>Ben has 1 sweet more than Tim.</p> <p><b>How many sweets does Ben have?</b></p>	
<p>Altogether, Kate and Zara have 23 grapes.</p> <p>Kate has 5 more grapes than Zara.</p> <p><b>How many grapes does Kate have?</b></p>	
<p> +  = 80</p> <p> -  = 10</p>	<p> =       =</p>

## More Than, Less Than

### Question A:

Joe and Dean have £14 in total.  
Joe has £6 more than Dean.

**How much money does Joe have?**

## Rank by Difficulty

## Extend

### Question B:

Kara and Olivia have £13 in total.  
Kara has £6 more than Olivia.

**How much money does Kara have?**

## More Than, Less Than

### Question A:

Joe and Dean have £14 in total.  
Joe has £6 more than Dean.

**How much money does Joe have?**

## Rank by Difficulty

## Extend

### Question B:

Kara and Olivia have £13 in total.  
Kara has £6 more than Olivia.

**How much money does Kara have?**

## More Than, Less Than

### Question A:

Joe and Dean have £14 in total.  
Joe has £6 more than Dean.

**How much money does Joe have?**

## Rank by Difficulty

## Extend

### Question B:

Kara and Olivia have £13 in total.  
Kara has £6 more than Olivia.

**How much money does Kara have?**