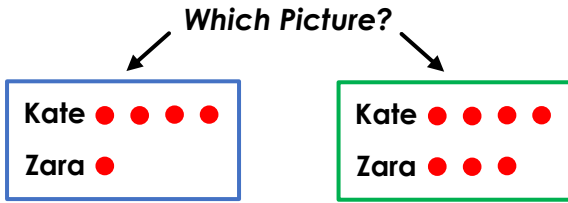


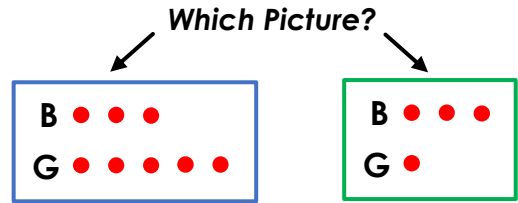
## More Than, Less Than

## Task A


Kate has 4 sweets.  
Kate has 3 more sweets than Zara.  
**How many sweets does Zara have?**



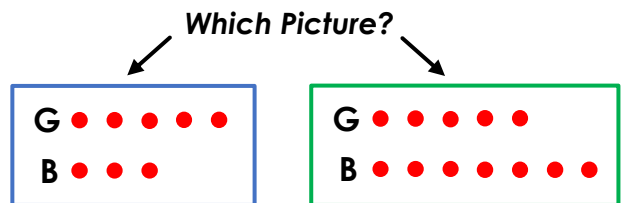
3 boys are sat at the table. There are  
2 fewer girls than boys sat at the table.  
**How many girls are sat at the table?**



Harry has 4 stickers.  
Harry has one sticker less than Max.  
**How many stickers does Max have?**




There are 5 girls at the park. There  
are 2 more girls than boys at the park.  
**How many boys are at the park?**



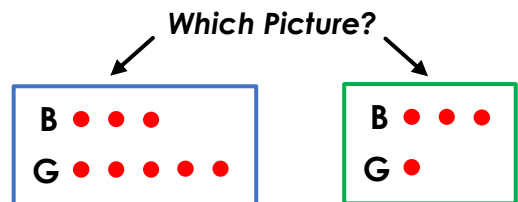
## More Than, Less Than

## Task A


Kate has 4 sweets.  
Kate has 3 more sweets than Zara.  
**How many sweets does Zara have?**



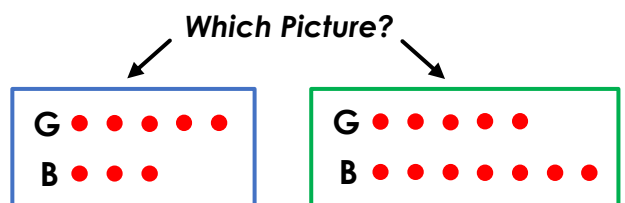
3 boys are sat at the table. There are  
2 fewer girls than boys sat at the table.  
**How many girls are sat at the table?**



Harry has 4 stickers.  
Harry has one sticker less than Max.  
**How many stickers does Max have?**

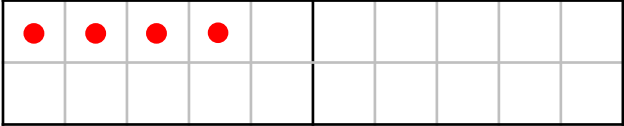



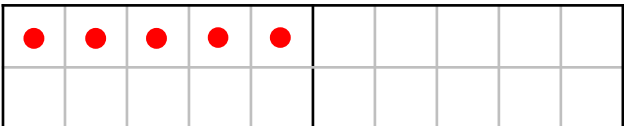



There are 5 girls at the park. There  
are 2 more girls than boys at the park.  
**How many boys are at the park?**





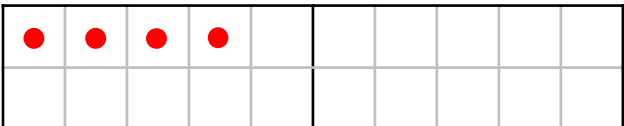

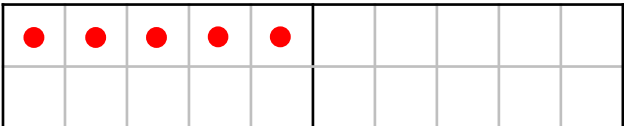

# More Than, Less Than

# Task B

Question:	Finish the picture and answer:
Ben has 4 pens. Mo has 3 pens fewer than Ben. <b>How many pens does Mo have?</b>	<div style="display: flex; align-items: center;"> <div style="margin-right: 10px;">Ben</div>  </div> <div style="display: flex; align-items: center; margin-top: 10px;"> <div style="margin-right: 10px;">Mo</div>  </div> <p>Answer:</p>
Ben has 4 cups. Ben has 3 cups fewer than Mo. <b>How many cups does Mo have?</b>	<div style="display: flex; align-items: center;"> <div style="margin-right: 10px;">Ben</div>  </div> <div style="display: flex; align-items: center; margin-top: 10px;"> <div style="margin-right: 10px;">Mo</div>  </div> <p>Answer:</p>
Jen has 5 grapes. Jen has 2 more grapes than Amy. <b>How many grapes does Amy have?</b>	<div style="display: flex; align-items: center;"> <div style="margin-right: 10px;">Jen</div>  </div> <div style="display: flex; align-items: center; margin-top: 10px;"> <div style="margin-right: 10px;">Amy</div>  </div> <p>Answer:</p>

# More Than, Less Than

# Task B

Question:	Finish the picture and answer:
Ben has 4 pens. Mo has 3 pens fewer than Ben. <b>How many pens does Mo have?</b>	<div style="display: flex; align-items: center;"> <div style="margin-right: 10px;">Ben</div>  </div> <div style="display: flex; align-items: center; margin-top: 10px;"> <div style="margin-right: 10px;">Mo</div>  </div> <p>Answer:</p>
Ben has 4 cups. Ben has 3 cups fewer than Mo. <b>How many cups does Mo have?</b>	<div style="display: flex; align-items: center;"> <div style="margin-right: 10px;">Ben</div>  </div> <div style="display: flex; align-items: center; margin-top: 10px;"> <div style="margin-right: 10px;">Mo</div>  </div> <p>Answer:</p>
Jen has 5 grapes. Jen has 2 more grapes than Amy. <b>How many grapes does Amy have?</b>	<div style="display: flex; align-items: center;"> <div style="margin-right: 10px;">Jen</div>  </div> <div style="display: flex; align-items: center; margin-top: 10px;"> <div style="margin-right: 10px;">Amy</div>  </div> <p>Answer:</p>

## More Than, Less Than

## Extend

Kim has 6 pens. Eve has 2 more pens than Kim.

**How many pens does Eve have?**

It says more so add.  
 $6 + 2 = 8$

**Which Answer?**

It says that Eve has 2 pens

Kim has 6 pencils. Kim has 2 more pencils than Eve.

**How many pencils does Eve have?**

It says more so add.  
 $6 + 2 = 8$

**Which Answer?**

Kim has more so subtract.  
 $6 - 2 = 4$

## More Than, Less Than

## Extend

Kim has 6 pens. Eve has 2 more pens than Kim.

**How many pens does Eve have?**

It says more so add.  
 $6 + 2 = 8$

**Which Answer?**

It says that Eve has 2 pens

Kim has 6 pencils. Kim has 2 more pencils than Eve.

**How many pencils does Eve have?**

It says more so add.  
 $6 + 2 = 8$

**Which Answer?**

Kim has more so subtract.  
 $6 - 2 = 4$

## More Than, Less Than

## Extend

Kim has 6 pens. Eve has 2 more pens than Kim.

**How many pens does Eve have?**

It says more so add.  
 $6 + 2 = 8$

**Which Answer?**

It says that Eve has 2 pens

Kim has 6 pencils. Kim has 2 more pencils than Eve.

**How many pencils does Eve have?**

It says more so add.  
 $6 + 2 = 8$

**Which Answer?**

Kim has more so subtract.  
 $6 - 2 = 4$